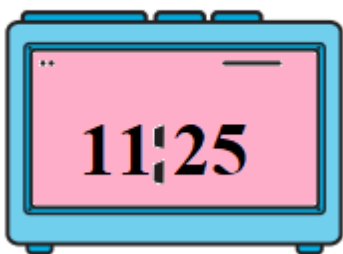


Topic: Time

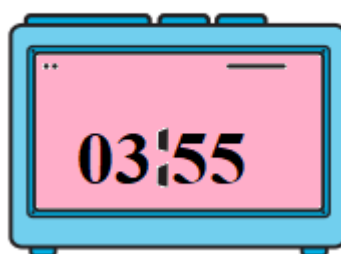
Object: Tell time to the minute on both analog and digital clocks, and solve problems involving time intervals.

* Write the time of each analog clock in the digital clock:

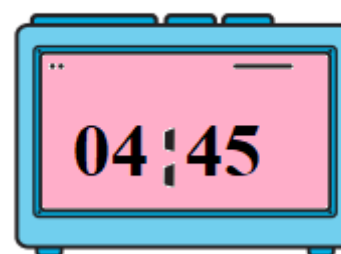
1)



2)



3)



* complete the following:

4) An hour and half = 90 minutes

5) 2 hours and 25 minutes = 145 minutes

6) 150 minutes = 2 hours + 30 minutes

7) An hour and quarter = 75 minutes

8) A month and a week = 37 days

9) It takes you 45 minutes to walk from home to school.
You leave at 07:05, what is the time to arrive the school?
Draw the hands of the analog clock.



10) The time now is 06:15
Draw the hands of the analog clock after 3 hours and quarter.

