


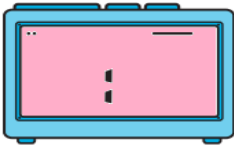
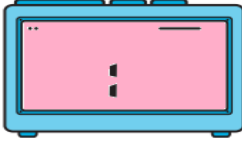
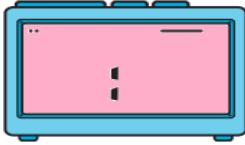








Topic: Time

Object: Tell time to the nearest five minutes on an analog clock and understand concepts like A.M. and P.M.

* Read the analog clock and write the time on digital clock:

1)	2)	3)
		
		

* Draw the analog clock hands to show the time of the digital clock:

4)	5)	6)
		
		

* Select the correct answer:

7) Eat Breakfast.	AM – PM
8) Go to Bed.	AM – PM
9) Go to swimming practice.	AM – PM
10) The number of seconds in 1 minute.	20 – 30 – 40 – 60
11) The number of minutes in 1 hour.	40 – 60 – 30 – 50
12) Twenty five to seven	07:35 – 07:25 – 6:25 – 6:35
13) Half past Three.	03:20 – 03:40 – 03:30 – 02:30
14) Twenty past twelve.	12:40 – 12:20 – 01:20 – 11:20
15) Ten to Three.	03:10 – 03:50 – 02:10 – 02:50
16) Five past six.	05:06 – 06:05 – 05:55 – 06:55

