
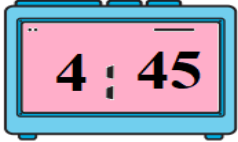

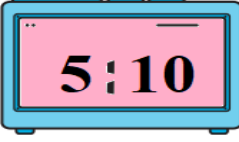

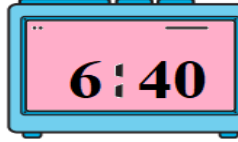


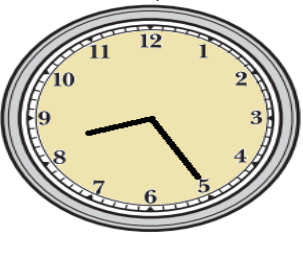
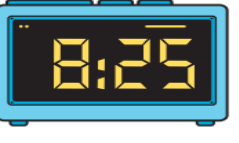
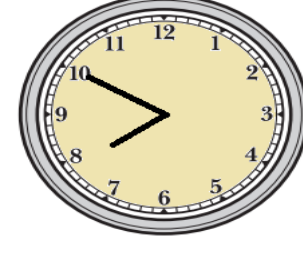



Object: Tell time to the nearest five minutes on an analog clock and understand concepts like A.M. and P.M.

* Read the analog clock and write the time on digital clock:

<p>1)</p>  	<p>2)</p>  	<p>3)</p>  
---	---	---

* Draw the analog clock hands to show the time of the digital clock:

<p>4)</p>  	<p>5)</p>  	<p>6)</p>  
--	--	--

* Select the correct answer:

7) Eat Breakfast.	<u>AM</u> – PM
8) Go to Bed.	AM – <u>PM</u>
9) Go to swimming practice.	AM – <u>PM</u>
10) The number of seconds in 1 minute.	20 – 30 – 40 – <u>60</u>
11) The number of minutes in 1 hour.	40 – <u>60</u> – 30 – 50
12) Twenty five to seven	07:35 – 07:25 – 6:25 – <u>6:35</u>
13) Half past Three.	03:20 – 03:40 – <u>03:30</u> – 02:30
14) Twenty past twelve.	12:40 – <u>12:20</u> – 01:20 – 11:20
15) Ten to Three.	03:10 – 03:50 – 02:10 – <u>02:50</u>
16) Five past six.	05:06 – <u>06:05</u> – 05:55 – 06:55