

Topic: Fractions.

Object: Introduce the concept of fractions, understanding halves, thirds, and quarters in shapes and sets.

* Write the fraction that represents the shaded part:

1) $\frac{1}{2}$



2) $\frac{1}{4}$



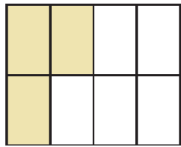
3) $\frac{1}{3}$



4) $\frac{6}{8}$ or $\frac{3}{4}$




5) $\frac{3}{8}$



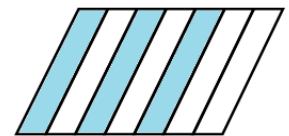
6) $\frac{3}{4}$



7) $\frac{3}{6}$ or $\frac{1}{2}$

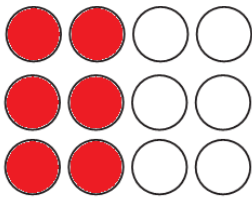


8) $\frac{3}{7}$

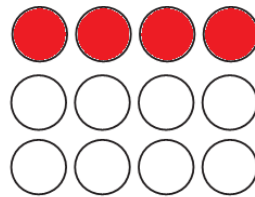


* Shade according to the fraction:

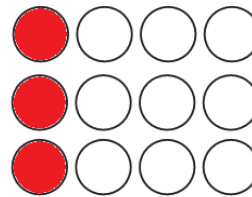
9) A half.




10) A third.



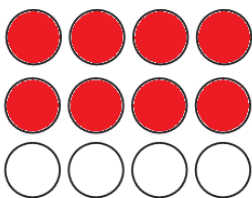
11) A quarter.



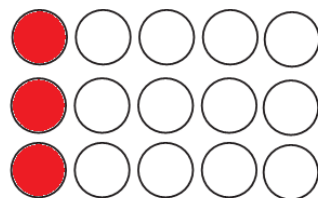
12) Two halves.



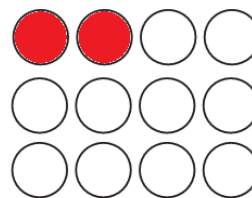
13) Two thirds.



14) A fifth.



15) A sixth.



16) Three quarters.

