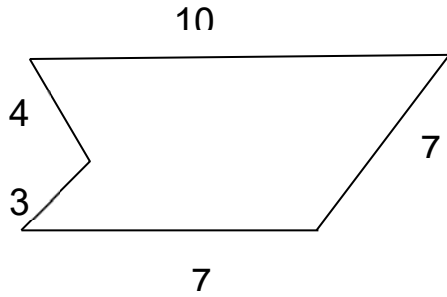


Geometry

ANSWER KEY

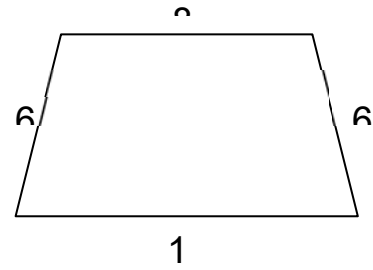
1.)



Area: 17

Perimeter: 31

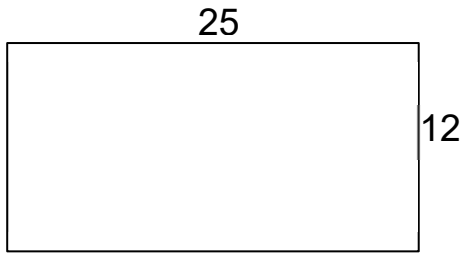
2.)



Area: 9

Perimeter: 30

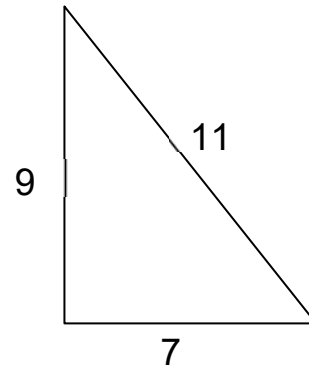
3.)



Area: 300

Perimeter: 74

4.)

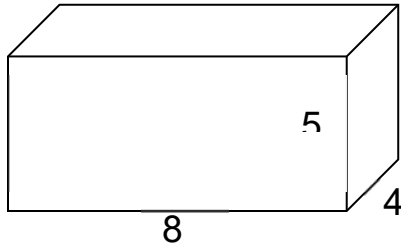


Area: 46.24

Perimeter: 27

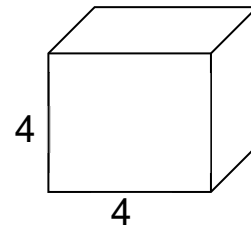
Directions: Calculate the surface area of each shape.

5.)



Surface Area: 184 units squared

6.)



Surface Area: 96 square units