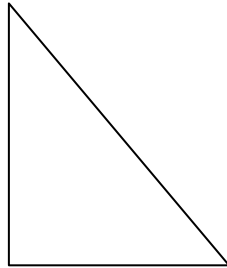
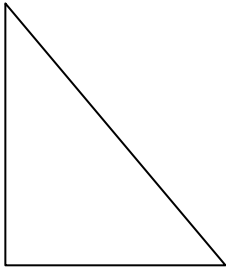


Geometry

Directions: Determine whether each pair of shapes are congruent, similar, or neither. Circle the correct response on the right.

7.)





Congruent

Similar

Neither

8.)





Congruent

Similar

Neither

9.)

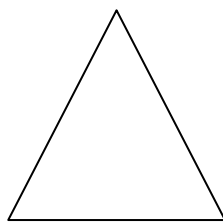



Congruent

Similar

Neither

10.)



Congruent

Similar

Neither

