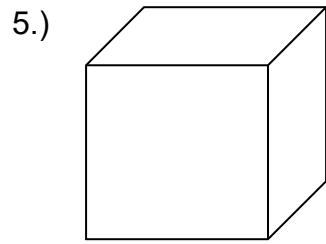


Geometry

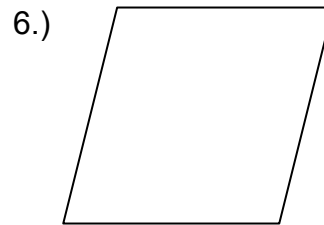
ANSWER KEY

- 1.) What is the measure of a right angle? 90°
- 2.) If the sum of two angles is 90°, what type of angles are they? complementary
- 3.) What is the measure of a straight angle? 180°
- 4.) What is the sum of the interior angles of a triangle? 180°

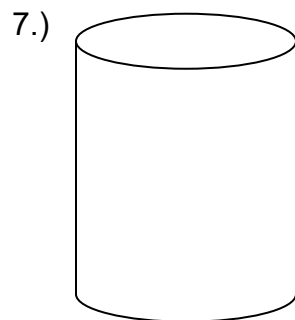
ANSWER KEY



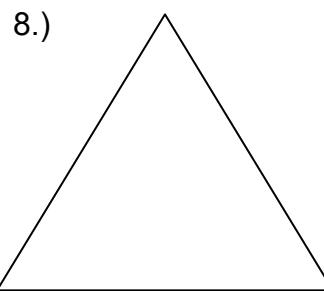
Cube



Rhombus



cylinder



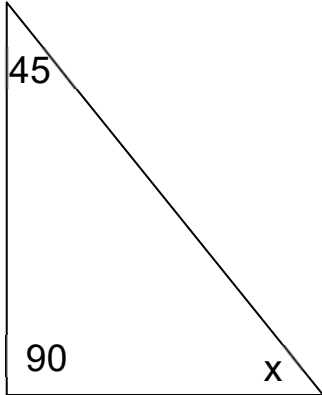
equilateral triangle



Geometry

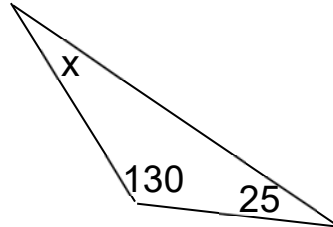
ANSWER KEY

9.)



x = 45°

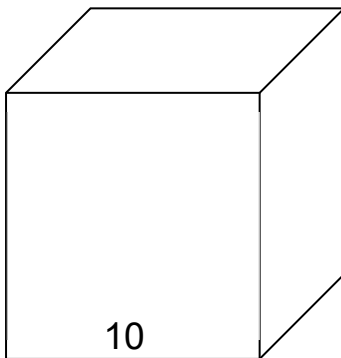
10.)



x = 25°

ANSWER KEY

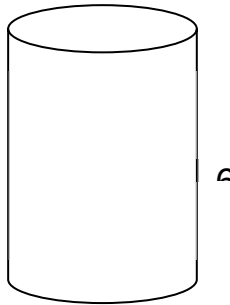
11.)



Volume: 1,000

Surface Area: 600

12.)



Volume: 169.56

Surface Area: 169.56