

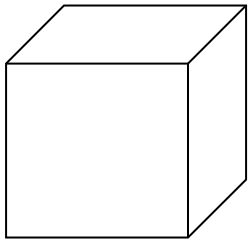
Geometry

Directions: Answer each question.

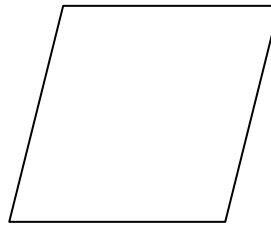
- 1.) What is the measure of a right angle? _____
- 2.) If the sum of two angles is 90° , what type of angles are they? _____
- 3.) What is the measure of a straight angle? _____
- 4.) What is the sum of the interior angles of a triangle? _____

Directions: Identify each shape.


5.)



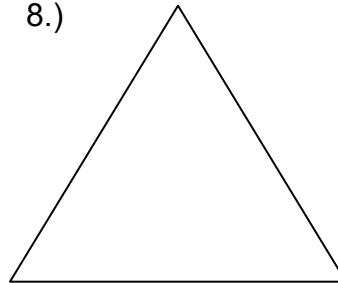
6.)



7.)



8.)

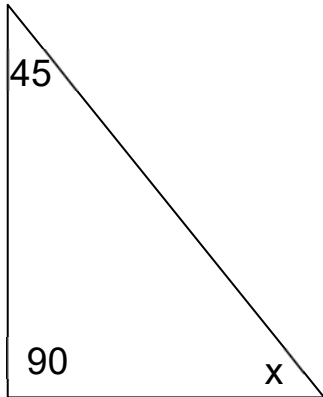




Geometry

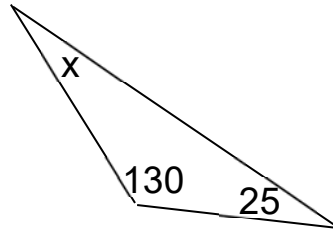
Directions: Find each missing angle measure.

9.)



x = _____

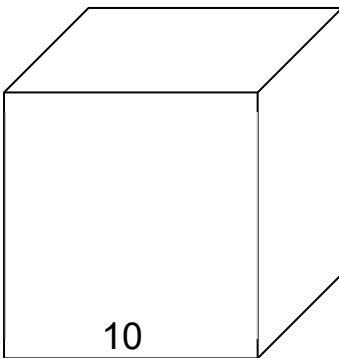
10.)



x = _____

Directions: Calculate the volume and surface area of each shape.

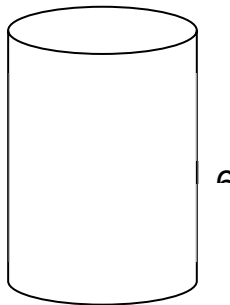
11.)



Volume: _____

Surface Area: _____

12.)



Volume: _____

Surface Area: _____