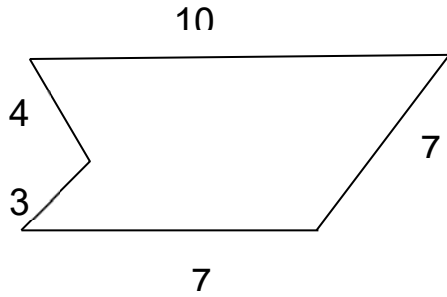


Geometry

Directions: Calculate the area and perimeter of each shape.

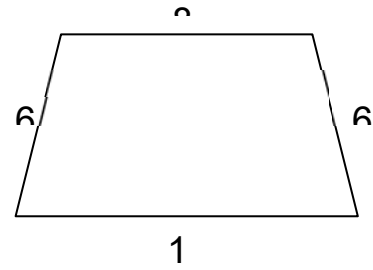
1.)



Area: _____

Perimeter: _____

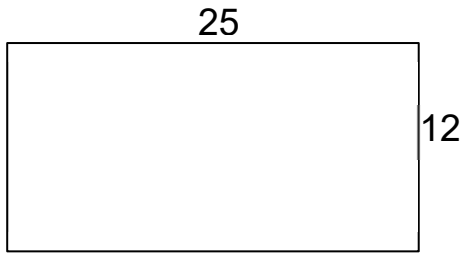
2.)



Area: _____

Perimeter: _____

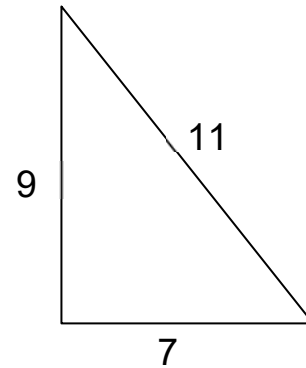
3.)



Area: _____

Perimeter: _____

4.)

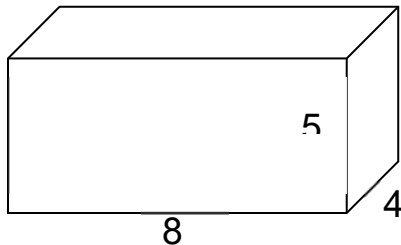


Area: _____

Perimeter: _____

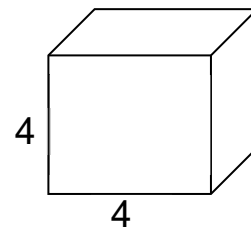
Directions: Calculate the surface area of each shape.

5.)



Surface Area: _____

6.)



Surface Area: _____