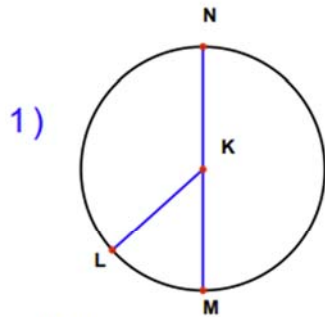
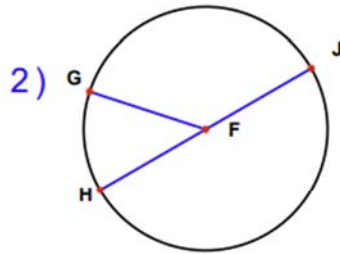


Identify Circle, Radius, and Diameter 2

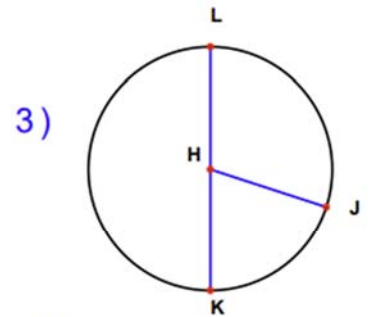
Identify the elements for each problem.



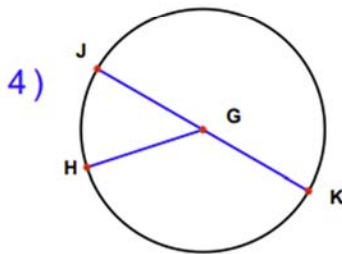
Circle: _____
 Radius: _____
 Diameter: _____



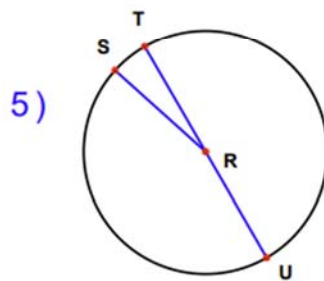
Circle: _____
 Radius: _____
 Diameter: _____



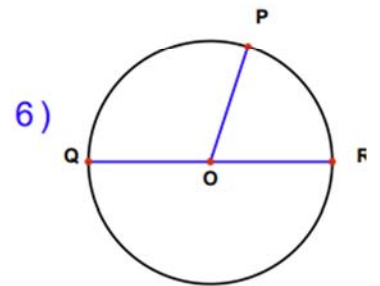
Circle: _____
 Radius: _____
 Diameter: _____



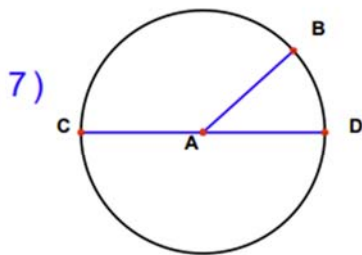
Circle: _____
 Radius: _____
 Diameter: _____



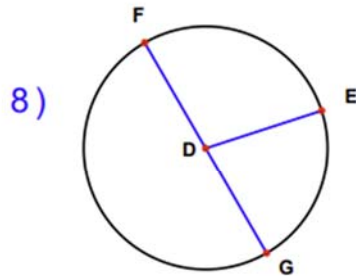
Circle: _____
 Radius: _____
 Diameter: _____



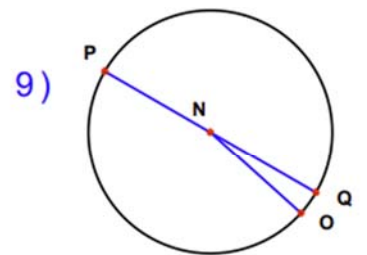
Circle: _____
 Radius: _____
 Diameter: _____



Circle: _____
 Radius: _____
 Diameter: _____



Circle: _____
 Radius: _____
 Diameter: _____



Circle: _____
 Radius: _____
 Diameter: _____